

Class: Geography

Lesson #13: Date April 8

Learning Target: SW Asia, I can describe the country of Iraq geographically.

IRAQ

TURKEY

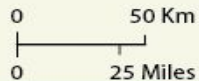
SYRIA

IRAN

JORDAN

SAUDI ARABIA

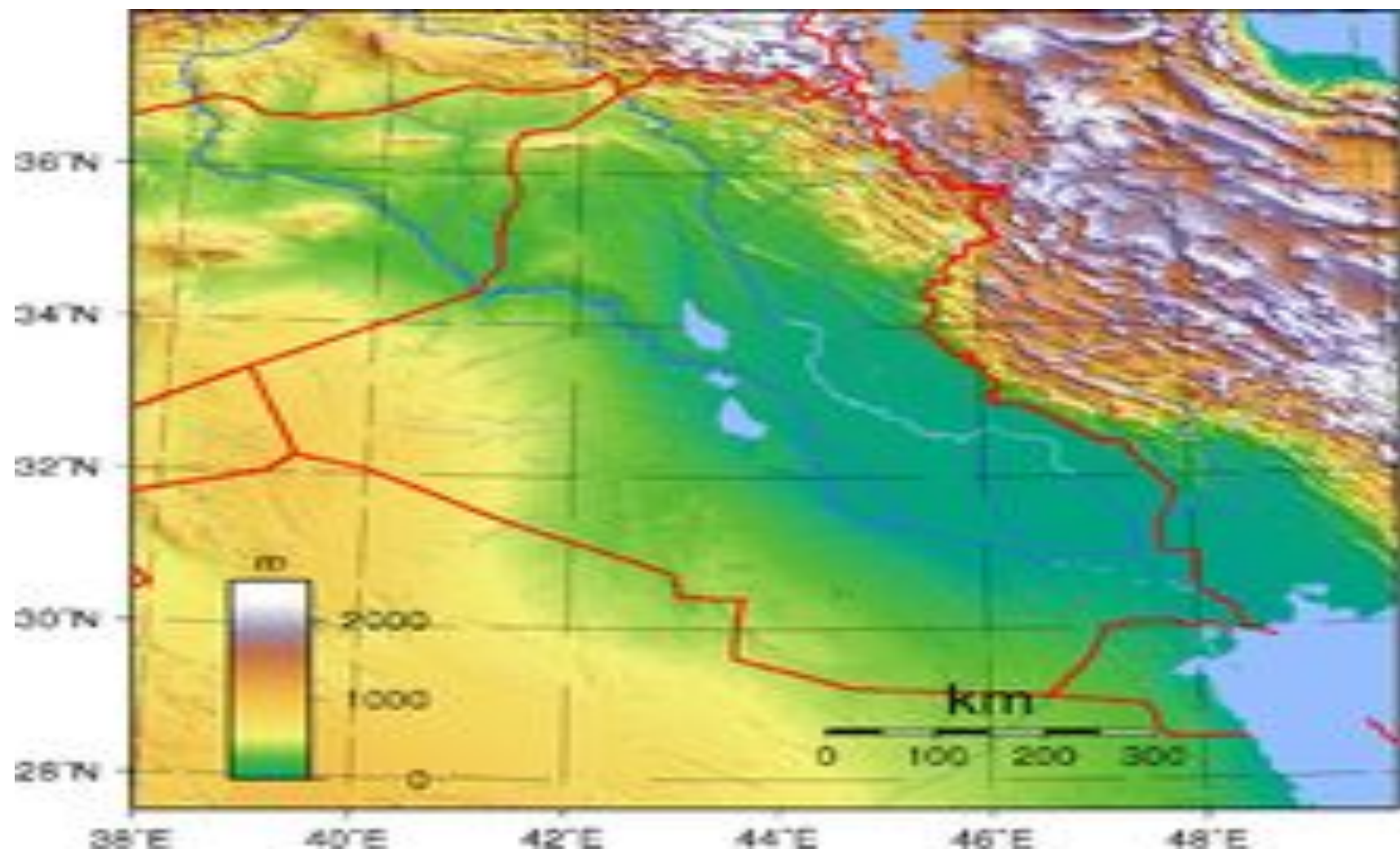
KUWAIT



LEGEND	
	Country Boundary
	Major Road
	River
	Major City
	Other City
	Mt. Peak
	Sea Port
	Country Capital
	Airport
	Point of Interest
	Park
	Lake

Copyright © 2012-13 www.mapsofworld.com
(Created on 22 November, 2012)









Warm-up

Look at the previous slides of the map of Iraq.

1. What are 3 things that you notice about these maps?

Warm-up

Look at the previous slide of the map of Iraq.

1. What are 3 things that you notice about this map?

Answers will vary-Deserts -Rivers running through it-mountains in the north- cities in the center of the country- Neighboring countries-Turkey- Iran- Kuwait- Saudi Arabia- Syria-Jordan


Practice Directions

1. **Look at the pictures and then guess what part of Iraq you think the picture was taken.**



Practice

1. What part of Iraq do you think the previous picture would be in?



abbd1990.jeeran.com

Practice

1. What part of Iraq do you think the previous picture would be in?



Practice

1. What part of Iraq do you think the previous picture would be in?

Practice/Reflection

[27 maps that explain the crisis in Iraq](#) Look at 5 maps and write a reflection on each map.